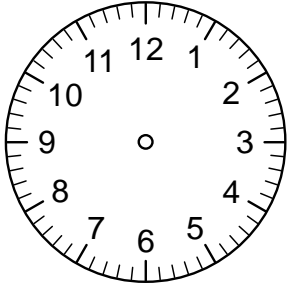


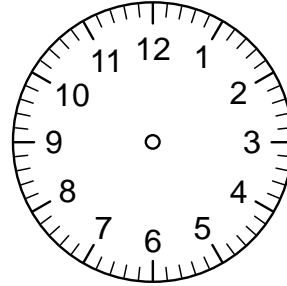
UHRZEITEN



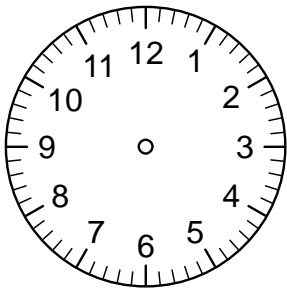
Zeichne überall die Zeiger ein!



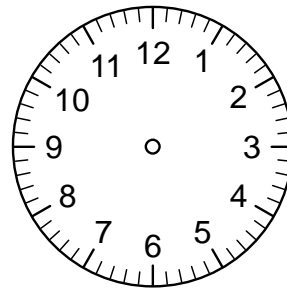
11:04 Uhr



7:21 Uhr

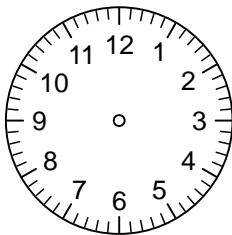


15:45 Uhr




20:55 Uhr

Wieviele Minuten sind vergangen?

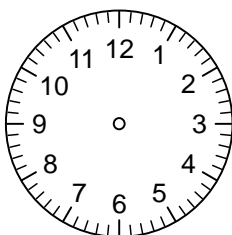


20:07 Uhr

Minuten




20:25 Uhr



14:14 Uhr

Minuten



15:32 Uhr